




Merryhill
School

Fall Activity Book

**A Free Resource for
Download & Print**

Name:

Decorate the Pumpkin



Merryhill
School

Name: _____

ADDITION PRACTICE

$2+4=$ _____

$1+3=$ _____

$5+6=$ _____

$1+7=$ _____

$2+6=$ _____

$8+3=$ _____

$9+3=$ _____

$2+8=$ _____

$7+3=$ _____

$2+1=$ _____

$6+6=$ _____

$9+7=$ _____

$7+7=$ _____

$3+5=$ _____

$5+5=$ _____

$2+3=$ _____

$5+8=$ _____

$2+1=$ _____

$8+8=$ _____

$7+6=$ _____

$9+9=$ _____



Name: _____

ADDITION PRACTICE

$6+3=$ _____

$1+3=$ _____

$5+9=$ _____

$1+7=$ _____

$2+6=$ _____

$4+3=$ _____

$9+3=$ _____

$1+8=$ _____

$1+3=$ _____

$2+1=$ _____

$6+2=$ _____

$6+7=$ _____

$7+4=$ _____

$2+5=$ _____

$6+5=$ _____

$2+3=$ _____

$5+5=$ _____

$1+1=$ _____

$3+8=$ _____

$7+6=$ _____

$9+4=$ _____



2 Digit Addition

Solve the addition equations

Name: _____

Date: _____

$$\begin{array}{r} 23 \\ +47 \\ \hline \end{array}$$

$$\begin{array}{r} 61 \\ +49 \\ \hline \end{array}$$

$$\begin{array}{r} 46 \\ +21 \\ \hline \end{array}$$

$$\begin{array}{r} 41 \\ +14 \\ \hline \end{array}$$

$$\begin{array}{r} 38 \\ +32 \\ \hline \end{array}$$

$$\begin{array}{r} 43 \\ +32 \\ \hline \end{array}$$

$$\begin{array}{r} 58 \\ +32 \\ \hline \end{array}$$

$$\begin{array}{r} 78 \\ +35 \\ \hline \end{array}$$

$$\begin{array}{r} 27 \\ +52 \\ \hline \end{array}$$

$$\begin{array}{r} 11 \\ +42 \\ \hline \end{array}$$

$$\begin{array}{r} 55 \\ +82 \\ \hline \end{array}$$

$$\begin{array}{r} 68 \\ +81 \\ \hline \end{array}$$



Name: _____



th Blends

Add a th to each of the following letters below to create a new word. Read the new word out loud.

pa

clo

ba

wi

ma

Be

ten

ear

fai

in

an

ump

ick

em

ese



Read the short story below and draw a picture of what is happening.







Jen likes to jump in the leaves.

The trees are full of color. She is happy.



Name: _____


Trace the **LETTERS!**



Solve the Maze



Start




Finish



Merryhill
School




Solve the Maze



Start

Finish







Name: _____

Falling Leaves

Follow and trace the vertical lines from top to bottom.



Bigger Number

Circle the larger number.

25 24

82 64

28 37

25 24

99 90

46 49

73 86

55 65